



Please write clearly in block capitals.

Centre number

--	--	--	--	--

Candidate number

--	--	--	--

Surname

Forename(s)

Candidate signature

I declare this is my own work.

GCSE MATHEMATICS

H


Higher Tier Paper 3 Calculator

Monday 11 November 2024 Morning Time allowed: 1 hour 30 minutes

Materials

For this paper you must have:

- a calculator
- mathematical instruments
- the Formulae Sheet (enclosed).



Instructions

- Use black ink or black ball-point pen. Draw diagrams in pencil.
- Fill in the boxes at the top of this page.
- Answer **all** questions.
- You must answer the questions in the spaces provided. Do not write outside the box around each page or on blank pages.
- If you need extra space for your answer(s), use the lined pages at the end of this book. Write the question number against your answer(s).
- Do all rough work in this book. Cross through any work you do not want to be marked.

Information

- The marks for questions are shown in brackets.
- The maximum mark for this paper is 80.
- You may ask for more answer paper, graph paper and tracing paper. These must be tagged securely to this answer book.

Advice

In all calculations, show clearly how you work out your answer.

For Examiner's Use	
Pages	Mark
2–3	
4–5	
6–7	
8–9	
10–11	
12–13	
14–15	
16–17	
18–19	
20–21	
22–23	
TOTAL	



N 0 V 2 4 8 3 0 0 3 H 0 1

Answer **all** questions in the spaces provided.

Do not write
outside the
box

- 1** Work out the reciprocal of $\frac{10}{3}$
Give your answer as a decimal.

[2 marks]

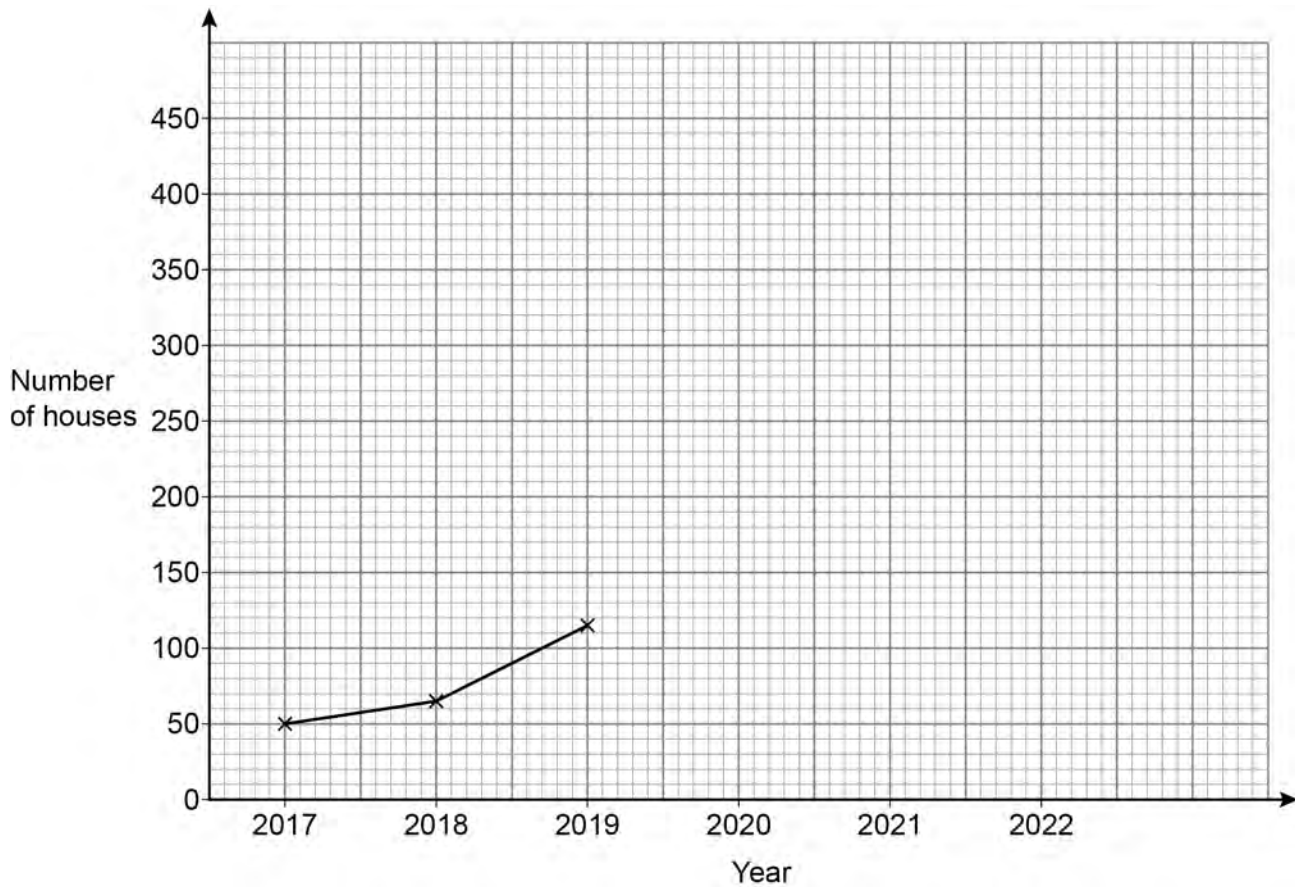
Answer _____



2 The table shows information about the number of houses with solar panels in a town.

Do not write outside the box

Year	2017	2018	2019	2020	2021	2022
Number of houses	50	65	115	210	275	350



2 (a) Complete the graph.

[2 marks]

2 (b) Use the graph to estimate the number of houses with solar panels in 2023

[1 mark]

Answer _____

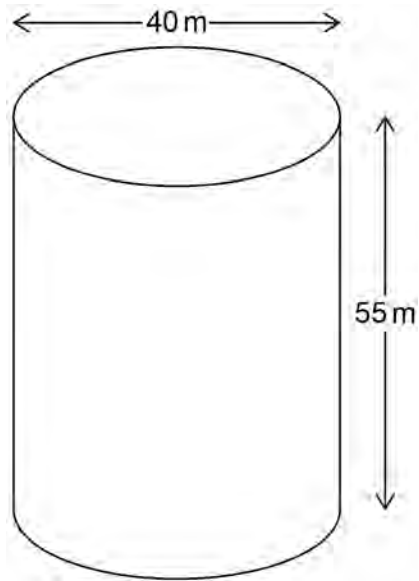
5

Turn over ►




- 3 A building in the shape of a cylinder has diameter 40 m and height 55 m

Do not write
outside the
box



- 3 (a) On the centimetre grid, draw a **plan** of the building.
Use a scale of 1 cm to 10 m


[2 marks]



- 3 (b)** On this centimetre grid, draw the **front elevation** of the building.
Use a scale of 1 cm to 10 m

*Do not write
outside the
box*

[2 marks]



Turn over for the next question

Turn over ►



4 To the **nearest pound**, Rosie has £12

She wants to buy 6 drinks.

Each drink costs £1.89

Show that Rosie **definitely** has enough money to buy the 6 drinks.

[3 marks]

5 The total cost of a taxi ride is calculated by adding

a fixed charge of £4

and

a charge of £2 per mile.

Write a formula to work out the total cost, £ C , of a journey of m miles.

[2 marks]

$$C = \underline{\hspace{10em}}$$



- 7 (a)** At a school
there are 912 students
the ratio of students to teachers is 15.2 : 1

The number of students stays the same.
The number of teachers increases by 2
Work out the new ratio of students to teachers.
Give your answer in the form $n : 1$

[3 marks]

Answer _____ : 1

- 7 (b)** On a school trip, one teacher is needed for every group of 10 or fewer students.
72 students want to go on the trip.
Lexi tries to work out how many teachers are needed.

$72 \div 10 = 7.2$
7 teachers are needed.

What is wrong with her answer?

[1 mark]



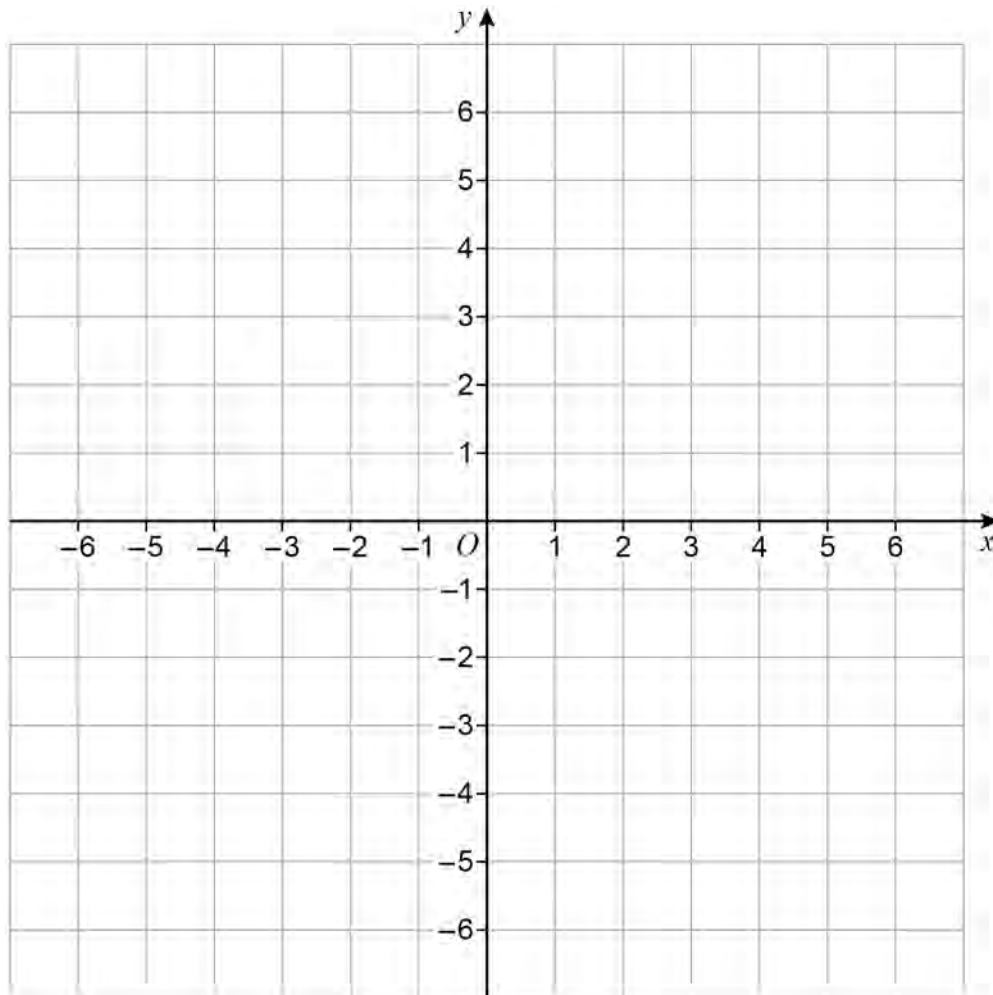
8

A triangle is drawn using the lines

$$y = x$$

$$x = -2$$

$$y = 4$$

Do not write
outside the
boxWork out the coordinates of the **three** vertices of the triangle.**[4 marks]**

Answer (_____ , _____)

(_____ , _____)

(_____ , _____)

Turn over ►



- 9** When x is divided by 2 the remainder is 1
When x is divided by 3 the remainder is 1
When x is divided by 4 the remainder is 1

Work out **two** possible values of x .

[2 marks]

$x =$ _____ and $x =$ _____

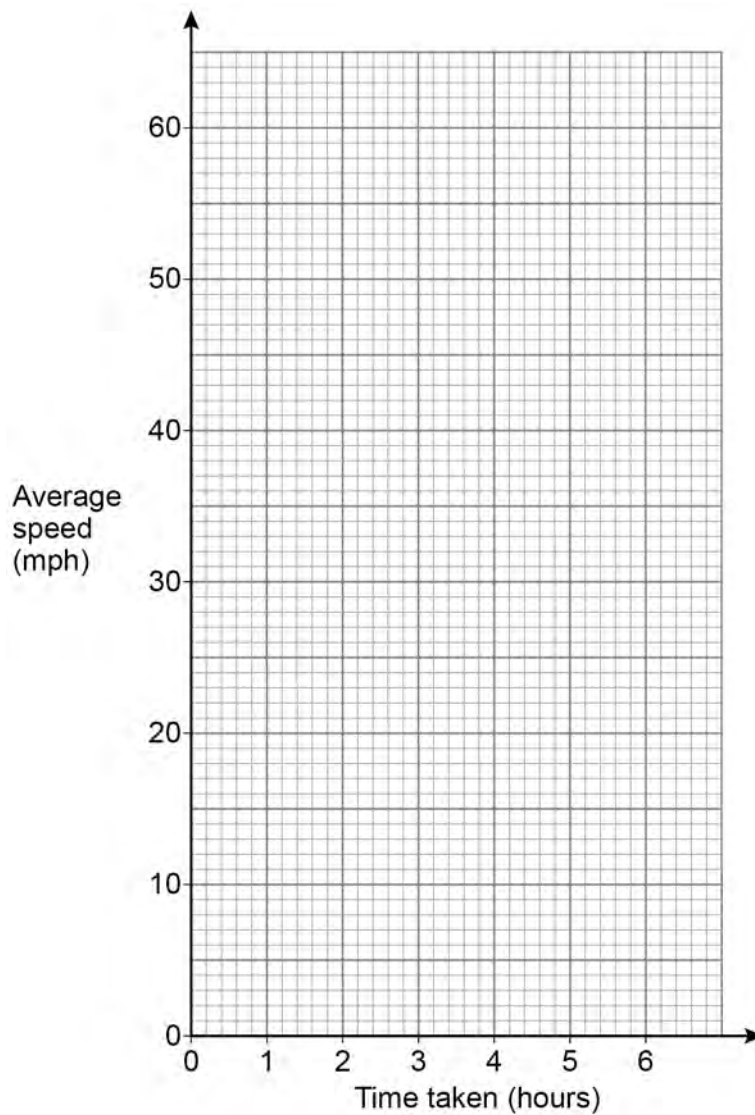


Do not write outside the box

10 A car will travel 60 miles.
 Draw a graph to show the **average speed** of the car for times taken between 1 hour and 6 hours.
 You may use the table to help you.

[3 marks]

Time taken (hours)	1	2	3	4	5	6
Average speed (mph)	60	30				10



5

Turn over ►



11 Factorise fully $12t + 4t^3$

[2 marks]

Answer _____

12 The population of a country is now 67 200 000

The population is predicted to

increase by 1% per year for 6 years

and then

decrease by 1.2% per year for 2 years.

Work out the predicted population of the country 8 years from now.

Give your answer to 3 significant figures.

[4 marks]

Answer _____



Do not write
outside the
box

13

A bag contains one £5 note, one £10 note, one £20 note and one £50 note.
Amaan picks **two** of the notes at random without replacement.

Work out the probability that he has picked **at least** £30

[2 marks]

Answer _____

Turn over for the next question

8

Turn over ►

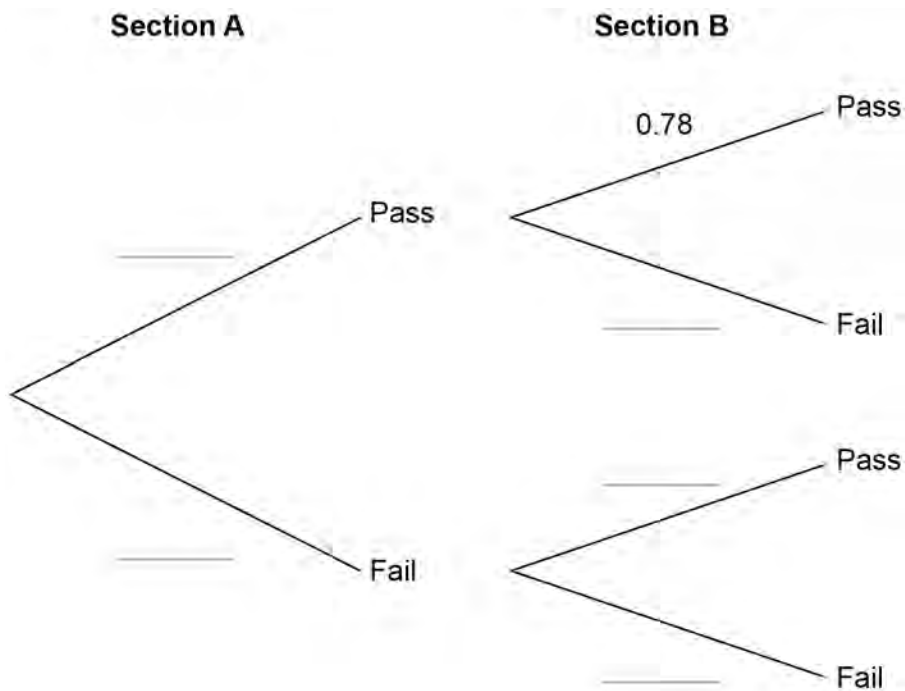


14 A test consists of two sections, A and B.

- 85% of people pass section A.
- 78% of people who **pass** section A also **pass** section B.
- 36% of people who **fail** section A also **fail** section B.

14 (a) Complete the tree diagram.

[2 marks]



Do not write
outside the
box

14 (b) 40% of people who fail **at least** one section take the test again.
5000 people take the test.

How many of these 5000 people are expected to take the test again?

[4 marks]

Answer _____

Turn over for the next question

6

Turn over ►



15 Match each equation to a statement to show what happens when the value of x is doubled.

One has been done for you.

[3 marks]

Equation	What happens when the value of x is doubled
$y = \frac{1}{x^2}$	The value of y is doubled
$y = 8x$	The value of y is divided by 4
$y = \frac{10}{x}$	It is not possible to say what happens to the value of y
$y = 3x^2$	The value of y is multiplied by 4
	The value of y is halved



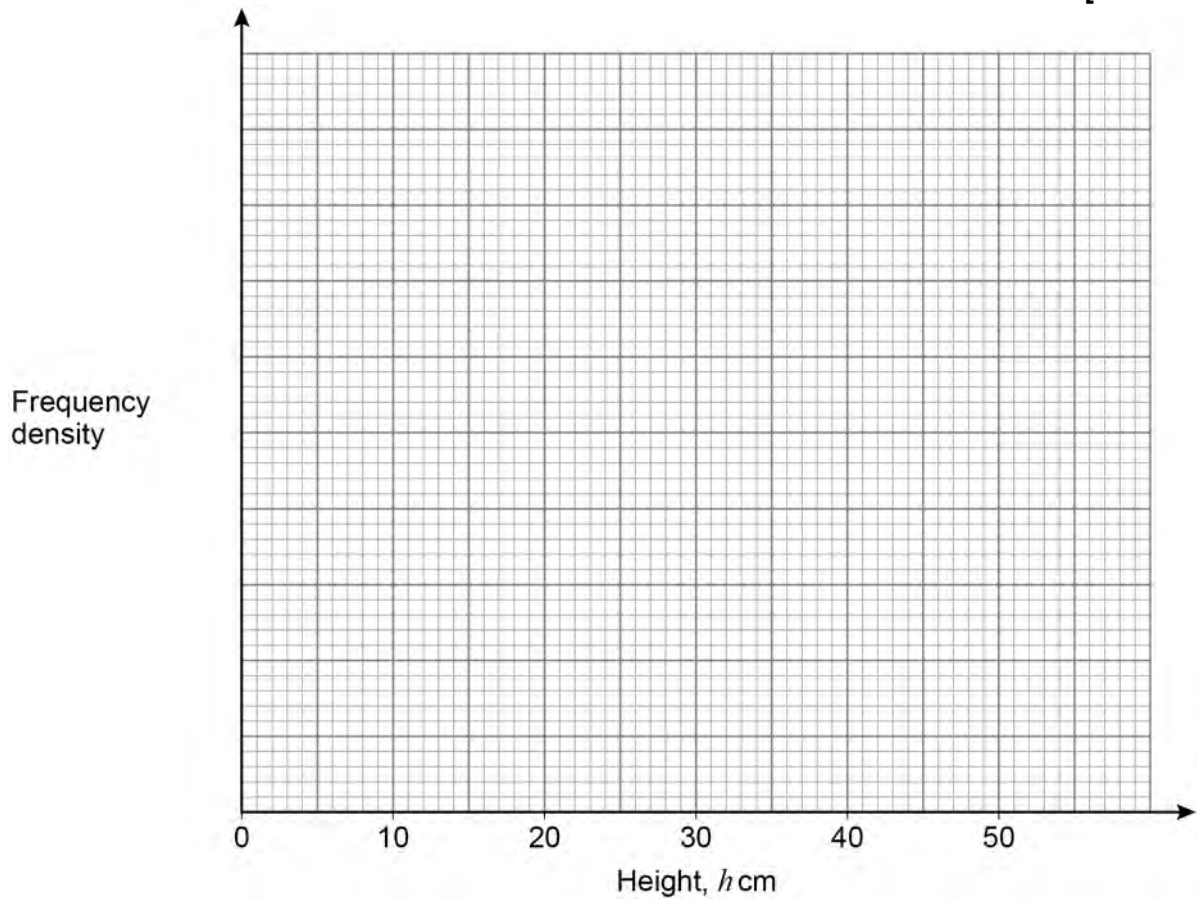
18 The table shows information about the height of 40 plants.

Do not write outside the box

Height, h cm	Frequency	Class width	
$0 \leq h < 5$	6		
$5 \leq h < 15$	15		
$15 \leq h < 25$	9		
$25 \leq h < 50$	10		

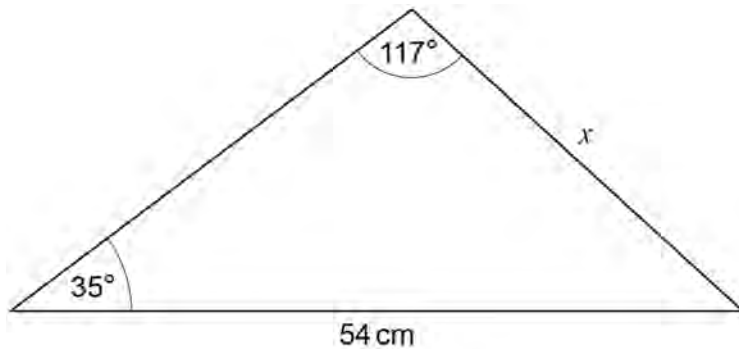
Draw a histogram to represent the heights.

[4 marks]





19

Not drawn
accuratelyDo not write
outside the
boxUse the sine rule to work out length x .You **must** show your working.**[3 marks]**

$$x = \text{_____ cm}$$

20

Factorise fully $3x^2 + 23x + 30$ **[2 marks]**

Answer _____

—
9

Turn over ►



21

A bag contains 25 discs.

11 are red, 9 are blue and 5 are yellow.

Ashley picks three of the discs at random without replacement.

Ashley's first disc is red.

Work out the probability that all three discs are different colours.

[3 marks]

Answer _____



22

The metal used to make a sphere costs £4320

The metal costs £3.60 per gram.

Each cubic centimetre of metal has a mass of 17.3 grams.

Work out the radius, r , of the sphere.

$$\text{Volume of a sphere} = \frac{4}{3}\pi r^3$$

[4 marks]

$r =$ _____ cm

Turn over for the next question

Do not write
outside the
box

7

Turn over ►

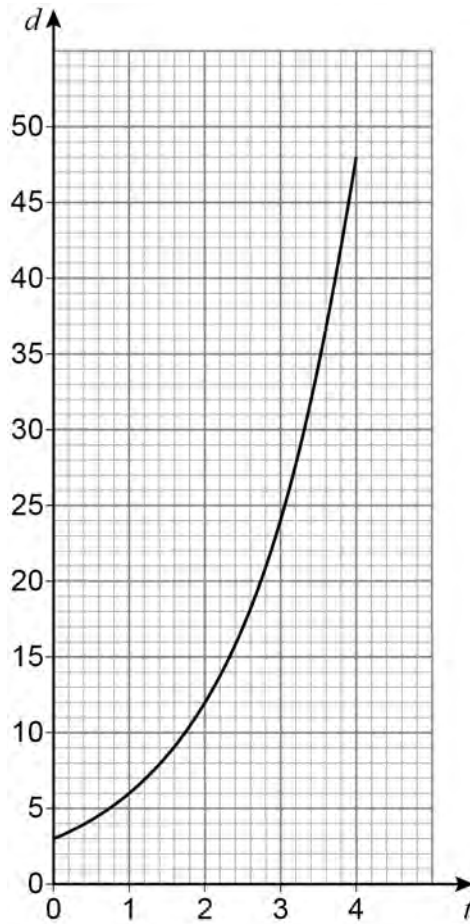


23

The distance of a particle from a point is d metres after t seconds.

Do not write
outside the
box

$$d = a \times b^t \quad \text{where } a \text{ and } b \text{ are constants}$$



Work out the values of a and b .

[3 marks]

$a =$ _____ $b =$ _____



There are no questions printed on this page

*Do not write
outside the
box*

**DO NOT WRITE ON THIS PAGE
ANSWER IN THE SPACES PROVIDED**



There are no questions printed on this page

*Do not write
outside the
box*

**DO NOT WRITE ON THIS PAGE
ANSWER IN THE SPACES PROVIDED**

Copyright information

For confidentiality purposes, all acknowledgements of third-party copyright material are published in a separate booklet. This booklet is published after each live examination series and is available for free download from www.aqa.org.uk.

Permission to reproduce all copyright material has been applied for. In some cases, efforts to contact copyright-holders may have been unsuccessful and AQA will be happy to rectify any omissions of acknowledgements. If you have any queries please contact the Copyright Team.

Copyright © 2024 AQA and its licensors. All rights reserved.

